


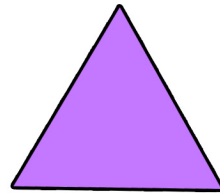


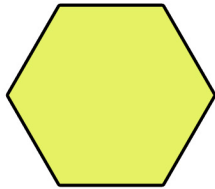
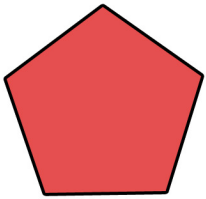
Date : \_\_\_\_\_

Name : \_\_\_\_\_


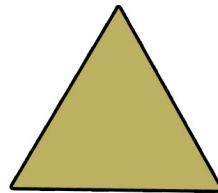


Score : \_\_\_\_\_

## Choose the Correct Shape

Which of these is a Hexagon ?



Which of these is a Square ?



Which of these is a Rectangle ?

